

No part of this product may be reproduced in any form or by any electronic or mechanical means, including information storage and retrieval systems, without written permission from the IB.

Additionally, the license tied with this product prohibits commercial use of any selected files or extracts from this product. Use by third parties, including but not limited to publishers, private teachers, tutoring or study services, preparatory schools, vendors operating curriculum mapping services or teacher resource digital platforms and app developers, is not permitted and is subject to the IB's prior written consent via a license. More information on how to request a license can be obtained from <http://www.ibo.org/contact-the-ib/media-inquiries/for-publishers/guidance-for-third-party-publishers-and-providers/how-to-apply-for-a-license>.

Aucune partie de ce produit ne peut être reproduite sous quelque forme ni par quelque moyen que ce soit, électronique ou mécanique, y compris des systèmes de stockage et de récupération d'informations, sans l'autorisation écrite de l'IB.

De plus, la licence associée à ce produit interdit toute utilisation commerciale de tout fichier ou extrait sélectionné dans ce produit. L'utilisation par des tiers, y compris, sans toutefois s'y limiter, des éditeurs, des professeurs particuliers, des services de tutorat ou d'aide aux études, des établissements de préparation à l'enseignement supérieur, des fournisseurs de services de planification des programmes d'études, des gestionnaires de plateformes pédagogiques en ligne, et des développeurs d'applications, n'est pas autorisée et est soumise au consentement écrit préalable de l'IB par l'intermédiaire d'une licence. Pour plus d'informations sur la procédure à suivre pour demander une licence, rendez-vous à l'adresse <http://www.ibo.org/fr/contact-the-ib/media-inquiries/for-publishers/guidance-for-third-party-publishers-and-providers/how-to-apply-for-a-license>.

No se podrá reproducir ninguna parte de este producto de ninguna forma ni por ningún medio electrónico o mecánico, incluidos los sistemas de almacenamiento y recuperación de información, sin que medie la autorización escrita del IB.

Además, la licencia vinculada a este producto prohíbe el uso con fines comerciales de todo archivo o fragmento seleccionado de este producto. El uso por parte de terceros —lo que incluye, a título enunciativo, editoriales, profesores particulares, servicios de apoyo académico o ayuda para el estudio, colegios preparatorios, desarrolladores de aplicaciones y entidades que presten servicios de planificación curricular u ofrezcan recursos para docentes mediante plataformas digitales— no está permitido y estará sujeto al otorgamiento previo de una licencia escrita por parte del IB. En este enlace encontrará más información sobre cómo solicitar una licencia: <http://www.ibo.org/es/contact-the-ib/media-inquiries/for-publishers/guidance-for-third-party-publishers-and-providers/how-to-apply-for-a-license>.

**Mathematics**  
**Higher level**  
**Paper 2**

Tuesday 14 May 2019 (morning)

Candidate session number

2 hours

--	--	--	--	--	--	--	--	--	--

**Instructions to candidates**

- Write your session number in the boxes above.
- Do not open this examination paper until instructed to do so.
- A graphic display calculator is required for this paper.
- Section A: answer all questions. Answers must be written within the answer boxes provided.
- Section B: answer all questions in the answer booklet provided. Fill in your session number on the front of the answer booklet, and attach it to this examination paper and your cover sheet using the tag provided.
- Unless otherwise stated in the question, all numerical answers should be given exactly or correct to three significant figures.
- A clean copy of the **mathematics HL and further mathematics HL formula booklet** is required for this paper.
- The maximum mark for this examination paper is **[100 marks]**.



Full marks are not necessarily awarded for a correct answer with no working. Answers must be supported by working and/or explanations. In particular, solutions found from a graphic display calculator should be supported by suitable working. For example, if graphs are used to find a solution, you should sketch these as part of your answer. Where an answer is incorrect, some marks may be given for a correct method, provided this is shown by written working. You are therefore advised to show all working.

### Section A

Answer **all** questions. Answers must be written within the answer boxes provided. Working may be continued below the lines, if necessary.

1. [Maximum mark: 5]

In triangle  $ABC$ ,  $AB = 5$ ,  $BC = 14$  and  $AC = 11$ .

Find all the interior angles of the triangle. Give your answers in degrees to one decimal place.

.....

.....

.....

.....

.....

.....

.....

.....

.....

.....

.....

.....



2. [Maximum mark: 5]

Timmy owns a shop. His daily income from selling his goods can be modelled as a normal distribution, with a mean daily income of \$820, and a standard deviation of \$230. To make a profit, Timmy's daily income needs to be greater than \$1000.

(a) Calculate the probability that, on a randomly selected day, Timmy makes a profit. [2]

The shop is open for 24 days every month.

(b) Calculate the probability that, in a randomly selected month, Timmy makes a profit on between 5 and 10 days (inclusive). [3]

.....

.....

.....

.....

.....

.....

.....

.....

.....

.....

.....

.....

.....

.....

.....

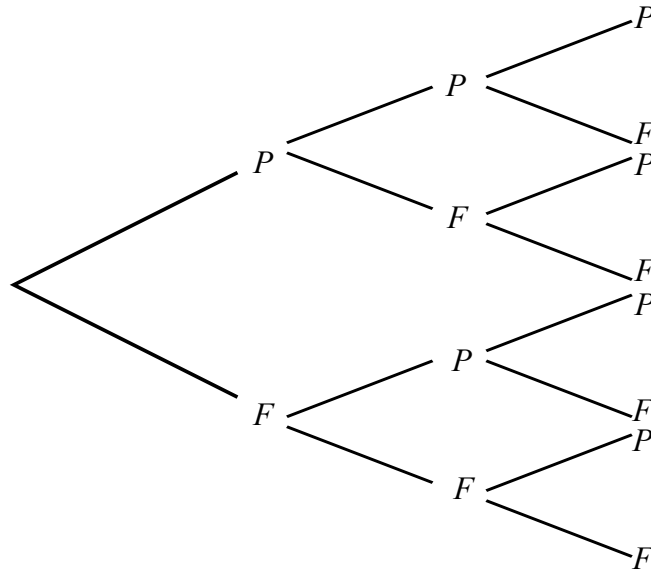
.....



3. [Maximum mark: 8]

Iqbal attempts three practice papers in mathematics. The probability that he passes the first paper is 0.6. Whenever he gains a pass in a paper, his confidence increases so that the probability of him passing the next paper increases by 0.1. Whenever he fails a paper the probability of him passing the next paper is 0.6.

(a) Complete the given probability tree diagram for Iqbal's three attempts, labelling each branch with the correct probability. [3]



(b) Calculate the probability that Iqbal passes at least two of the papers he attempts. [2]

(c) Find the probability that Iqbal passes his third paper, given that he passed only one previous paper. [3]

.....

.....

.....

.....

.....

.....

.....

.....

.....

.....

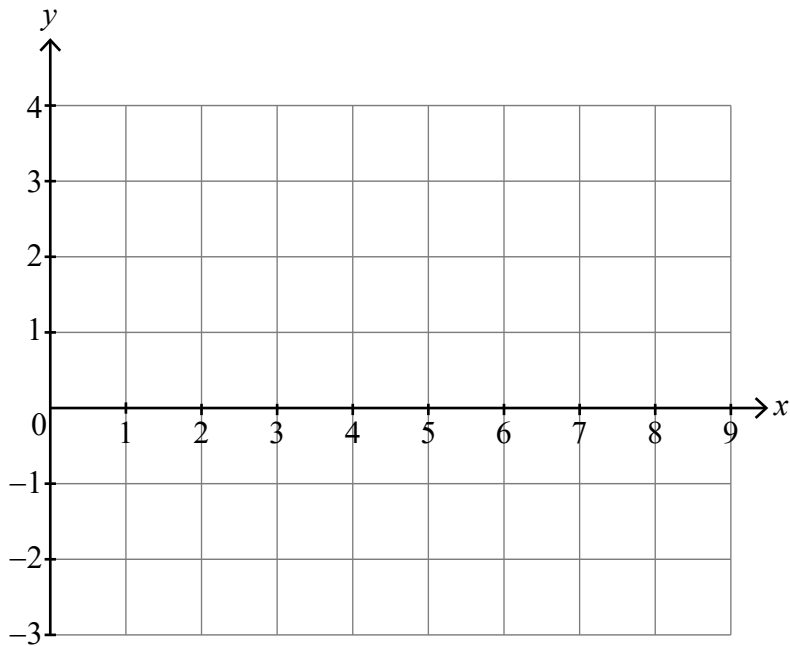
.....



4. [Maximum mark: 6]

(a) Sketch the graphs of  $y = \sin^3 x + \ln x$  and  $y = 1 + \cos x$  on the following axes for  $0 < x \leq 9$ .

[2]



(b) Hence solve  $\sin^3 x + \ln x - \cos x - 1 < 0$  in the range  $0 < x \leq 9$ .

[4]

.....

.....

.....

.....

.....

.....

.....

.....

.....

.....

.....

.....

.....

.....

.....

.....

.....

.....

.....

.....

.....

.....

.....



5. [Maximum mark: 6]

(a) Prove the identity  $\frac{1 + \sin 2x}{\cos 2x} \equiv \frac{1 + \tan x}{1 - \tan x}$ . [4]

(b) Solve the equation  $\frac{1 + \sin 2x}{\cos 2x} = \sqrt{3}$  for  $0 \leq x < 2\pi$ . [2]

.....

.....

.....

.....

.....

.....

.....

.....

.....

.....

.....

.....

.....

.....

.....







7. [Maximum mark: 7]

Suppose that  $u_1$  is the first term of a geometric series with common ratio  $r$ .

Prove, by mathematical induction, that the sum of the first  $n$  terms,  $S_n$  is given by

$$S_n = \frac{u_1(1-r^n)}{1-r}, \text{ where } n \in \mathbb{Z}^+.$$

.....

.....

.....

.....

.....

.....

.....

.....

.....

.....

.....

.....

.....

.....

.....

.....





Do **not** write solutions on this page.

### Section B

Answer **all** questions in the answer booklet provided. Please start each question on a new page.

9. [Maximum mark: 15]

Consider the polynomial  $P(z) \equiv z^4 - 6z^3 - 2z^2 + 58z - 51, z \in \mathbb{C}$ .

- (a) Express  $P(z)$  in the form  $(z^2 + az + b)(z^2 + cz + d)$  where  $a, b, c, d \in \mathbb{R}$ . [7]
- (b) Sketch the graph of  $y = x^4 - 6x^3 - 2x^2 + 58x - 51$ , stating clearly the coordinates of any maximum and minimum points and intersections with axes. [6]
- (c) Hence, or otherwise, state the condition on  $k \in \mathbb{R}$  such that all roots of the equation  $P(z) = k$  are real. [2]

10. [Maximum mark: 16]

Steffi the stray cat often visits Will's house in search of food. Let  $X$  be the discrete random variable "the number of times per day that Steffi visits Will's house". The random variable  $X$  can be modelled by a Poisson distribution with mean 2.1.

- (a) Find the probability that on a randomly selected day, Steffi does not visit Will's house. [2]

Let  $Y$  be the discrete random variable "the number of times per day that Steffi is fed at Will's house". Steffi is only fed on the first four occasions that she visits each day.

- (b) Copy and complete the probability distribution table for  $Y$ . [4]

$y$	0	1	2	3	4
$P(Y = y)$					

- (c) Hence find the expected number of times per day that Steffi is fed at Will's house. [3]
- (d) In any given year of 365 days, the probability that Steffi does not visit Will for at most  $n$  days in total is 0.5 (to one decimal place). Find the value of  $n$ . [3]
- (e) Show that the expected number of occasions per year on which Steffi visits Will's house and is not fed is at least 30. [4]



Do **not** write solutions on this page.

11. [Maximum mark: 19]

The plane  $\Pi_1$  contains the points  $P(1, 6, -7)$ ,  $Q(0, 1, 1)$  and  $R(2, 0, -4)$ .

(a) Find the Cartesian equation of the plane containing  $P$ ,  $Q$  and  $R$ . [6]

The Cartesian equation of the plane  $\Pi_2$  is given by  $x - 3y - z = 3$ .

(b) Given that  $\Pi_1$  and  $\Pi_2$  meet in a line  $L$ , verify that the vector equation of  $L$  can be

given by  $\mathbf{r} = \begin{pmatrix} 5 \\ 4 \\ 0 \\ -7 \\ -4 \end{pmatrix} + \lambda \begin{pmatrix} 1 \\ 2 \\ 1 \\ -5 \\ 2 \end{pmatrix}$ . [3]

The Cartesian equation of the plane  $\Pi_3$  is given by  $ax + by + cz = 1$ .

(c) Given that  $\Pi_3$  is parallel to the line  $L$ , show that  $a + 2b - 5c = 0$ . [1]

Consider the case that  $\Pi_3$  contains  $L$ .


(d) (i) Show that  $5a - 7c = 4$ .

(ii) Given that  $\Pi_3$  is equally inclined to both  $\Pi_1$  and  $\Pi_2$ , determine two distinct possible Cartesian equations for  $\Pi_3$ . [9]



Please **do not** write on this page.

Answers written on this page  
will not be marked.



12EP12